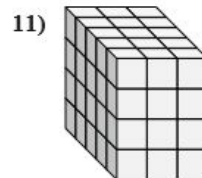
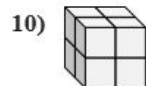
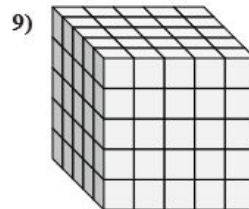
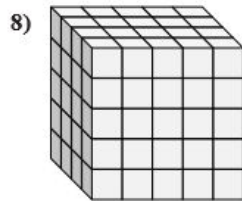
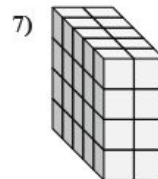
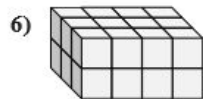
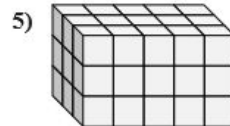
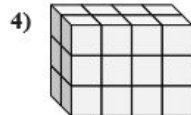
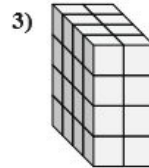
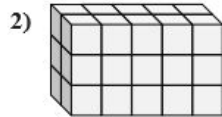
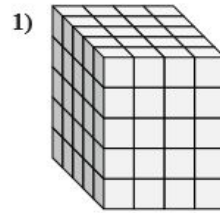
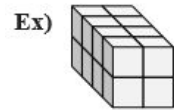




Finding Volume with Unit Cubes

Name: _____

Find the length, width and height of the rectangular prism. Then find the volume.



Answers

	L	W	H	V
Ex.	4	2	2	16
1.	_____	_____	_____	_____
2.	_____	_____	_____	_____
3.	_____	_____	_____	_____
4.	_____	_____	_____	_____
5.	_____	_____	_____	_____
6.	_____	_____	_____	_____
7.	_____	_____	_____	_____
8.	_____	_____	_____	_____
9.	_____	_____	_____	_____
10.	_____	_____	_____	_____
11.	_____	_____	_____	_____